

SOLVE PROBLEMS

KS1 – 2001 Paper

1.

Sadi needs **26** cartons of juice for her party.

There are **four** cartons in a pack.




31 How many packs does she need to buy?

 packs

KS1 – 2003 Paper 1

2.

27 There are **60** sweets in a bag.



20 sweets are red.

16 sweets are yellow.


The rest are green.

How many sweets are green?

Show how you work it out in the box.

green sweets

27 When Desi is **4** years old, Sita is **10**



When Desi is **9** years old, how old will Sita be?

years



Kemi is looking at a number on a card.


She **doubles** the number then **adds 3**

Her answer is **15**

What number is she looking at?



q



There are **11** boys and **16** girls in Blue Class.

a How many children are in Blue Class altogether?

children

b There are **more** girls than boys.

How many more?

15

Ten children can sit at one table.



There are **43** children.

How many tables are needed so that each child can sit at a table?

tables

7.

26

Write the missing number.

double 36 = half of

KS1 – 2007 Paper 2

8.

26

Write the answer.

$$253 - 138 =$$

KS1 – 2009 Paper 1

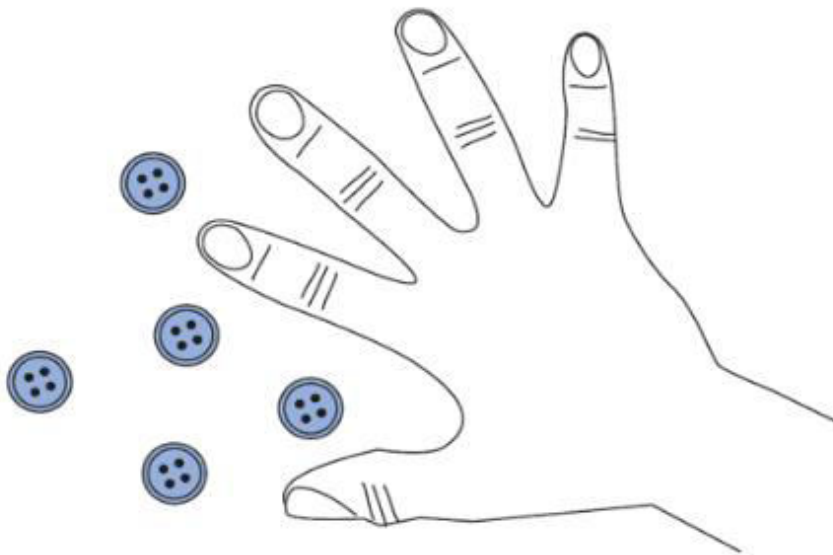
9.

17

Ben puts **15** buttons on a table.

He hides some of them under his hand.

How many buttons is Ben hiding?




buttons

10.

14 Tara has **4** books.

Ravi has **3 times as many** books as Tara.




How many books do Tara and Ravi have **altogether**?

books

11.

15 Miss West needs **28** paper cups.

She has to buy them in packs of **6**



How many packs does she have to buy?

packs

12.

17

The table shows how many 10p, 5p and 2p coins Tara has.

Coin	Number of coins
10p	8
5p	4
2p	5

How much money does she have altogether?

Work it out in the box.

£

KS1 – 2016 Paper - Reasoning

13.

17

Sam is collecting cards.

He wants to collect **100** cards altogether.

Last week he collected **50** cards.

This week he collects **30** cards.

How many **more** cards does he need?



--


cards

14.

22 Amy plants **4** rows of carrots.

There are **3** carrots in each row.

A rabbit eats **2** of the carrots.



How many carrots are left?

carrots



2 marks

KS1 – 2016 Paper – Reasoning (Second)

15.

13 Write two numbers to make this calculation correct.

$$\square + \square = 19$$

Now write three numbers to make this calculation correct.

$$\square + \square + \square = 19$$



1 mark



1 mark

KS1 – 2017 Paper – Reasoning

16.

30 There are **76** cars in the car park.

18 more cars go into the car park.

Then **35** cars go out.

How many cars are in the car park **now**?



cars



2 marks

KS1 – 2018 Paper – Reasoning


17.

30 Ben has **7** bags of grapes.

Each bag has **10** grapes.

Ben gives **25** grapes to his friends.

How many grapes does he have **left**?



grapes



2 marks

KS1 – 2022 Paper – Reasoning

18.

20 Circle the calculation with the largest answer.

$5 + 2$

$10 - 3$

$9 - 1$

$4 + 1$



1 mark

19.

26 There are **43** people on a bus.

15 people get off.

8 people get on.



How many people are on the bus **now**?

Show
your
working

people



2 marks